









1 How many tents?

- (a) 14 cubs – 2 in each tent      (b) 20 cubs – 4 in each tent  
 (c) 45 cubs – 5 in each tent      (d) 12 cubs – 3 in each tent  
 (e) 60 cubs – 10 in each tent      (f) 30 cubs – 3 in each tent

2 Divide equally among the tents.

- (a) 5 cubs in 5 tents      (b) 28 cubs in 4 tents  
 (c) 24 cubs in 3 tents      (d) 30 cubs in 10 tents  
 (e) 8 cubs in 4 tents      (f) 25 cubs in 5 tents

3



4

(a)  $\blacksquare \div 3 = 6$

(b)  $\blacksquare \div 2 = 9$

(c)  $\blacksquare \div 5 = 4$

(d)  $40 \div \blacksquare = 10$

(e)  $70 \div \blacksquare = 7$

(f)  $15 \div \blacksquare = 5$